

KG WORKSHEET

SUBJECT: ARITHMETIC

TOPIC: GREATER, LESSER AND EQUAL SIGN

RECAPITULATION:

The topic greater than, lesser than and equal sign was taught and explained

Q1) Put the sign $>$, $<$, or $=$

a) 10 ____ 12

b) 22 ____ 22

c) 17 ____ 19

d) 5 ____ 6

e) 32 ____ 23

f) 11 ____ 11

g) 40 ____ 60











h) 29 ____ 39

i) 31 ____ 13

j) 8 ____ 7



Q2) Count and put the correct sign $>$, $<$, $=$

1		<input type="checkbox"/>	
2		<input type="checkbox"/>	
3		<input type="checkbox"/>	
4		<input type="checkbox"/>	
5		<input type="checkbox"/>	

Q3) Colour and put the sign $>$, $<$, $=$

