









# KG WORKSHEET

SUBJECT- ARITHMETIC

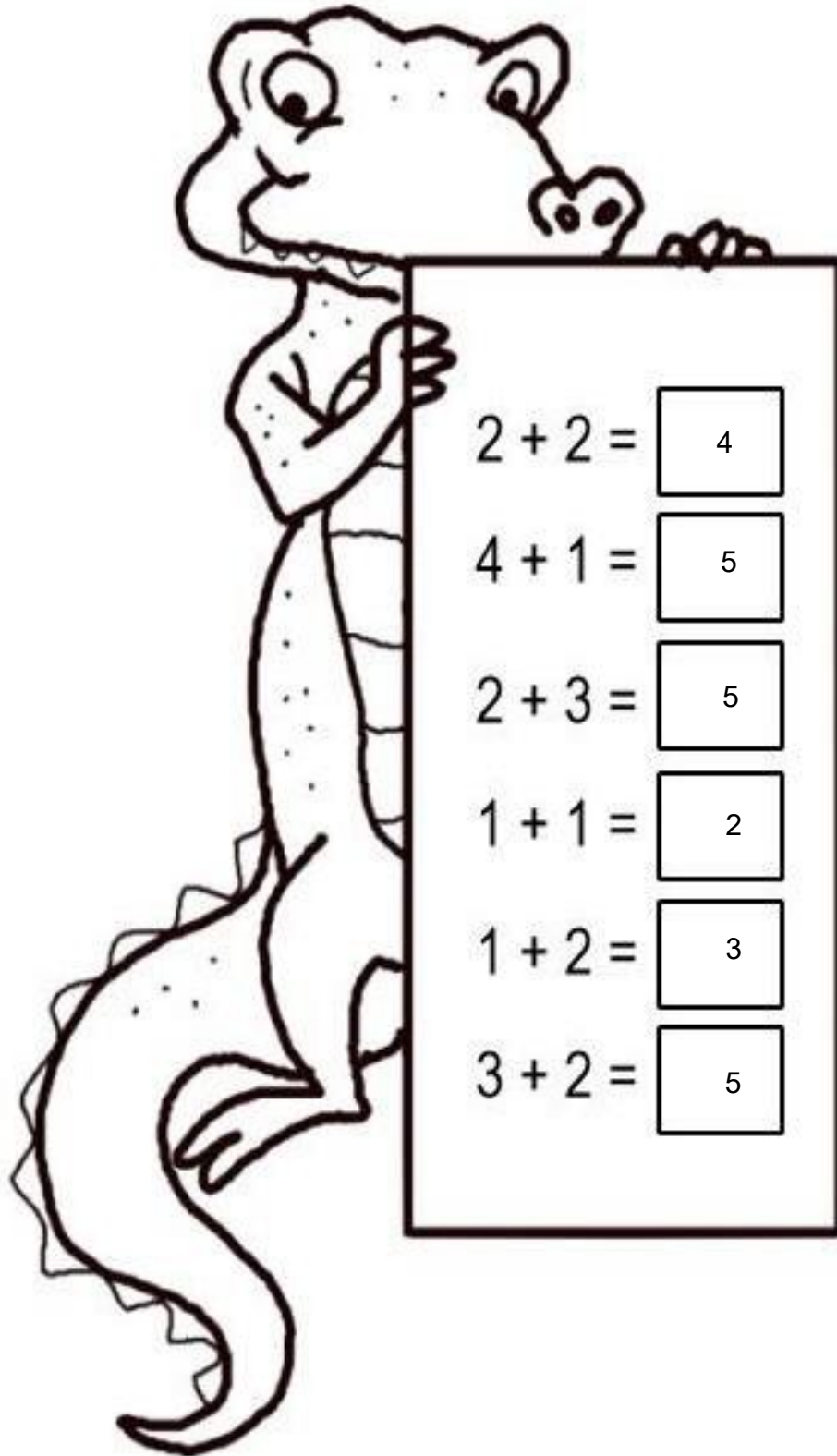
TOPIC- ADDITION

## ANSWER KEY

Q1) count and add the numbers

		
2	+	3 = 5
<hr/>		
		
4	+	2 = 6
<hr/>		
		
4	+	3 = 7
<hr/>		
		
5	+	2 = 7

Q2) Add and write the numbers in the box



Q3) Add the following

$$\begin{array}{r} 1) \\ + 51 \\ 42 \\ \hline 93 \end{array}$$

$$\begin{array}{r} 2) \\ + 37 \\ 42 \\ \hline 79 \end{array}$$

$$\begin{array}{r} 3) \\ + 42 \\ 36 \\ \hline 78 \end{array}$$

$$\begin{array}{r} 4) \\ + 52 \\ 34 \\ \hline 86 \end{array}$$

$$\begin{array}{r} 5) \\ + 33 \\ 35 \\ \hline 68 \end{array}$$

$$\begin{array}{r} 6) \\ + 27 \\ 62 \\ \hline 89 \end{array}$$

$$\begin{array}{r} 7) \\ + 11 \\ 34 \\ \hline 45 \end{array}$$

$$\begin{array}{r} 8) \\ + 67 \\ 12 \\ \hline 79 \end{array}$$

$$\begin{array}{r} 9) \\ + 34 \\ 42 \\ \hline 76 \end{array}$$

$$\begin{array}{r} 10) \\ + 23 \\ 45 \\ \hline 68 \end{array}$$

$$\begin{array}{r} 11) \\ + 34 \\ 25 \\ \hline 59 \end{array}$$

$$\begin{array}{r} 12) \\ + 42 \\ 31 \\ \hline 73 \end{array}$$

Q4) Add the following

$$\begin{array}{r} 734 \\ + 243 \\ \hline 977 \end{array}$$

$$\begin{array}{r} 736 \\ + 243 \\ \hline 979 \end{array}$$

$$\begin{array}{r} 210 \\ + 364 \\ \hline 574 \end{array}$$

$$\begin{array}{r} 320 \\ + 553 \\ \hline 873 \end{array}$$

$$\begin{array}{r} 432 \\ + 560 \\ \hline 992 \end{array}$$

$$\begin{array}{r} 114 \\ + 483 \\ \hline 597 \end{array}$$

$$\begin{array}{r} 305 \\ + 410 \\ \hline 715 \end{array}$$

$$\begin{array}{r} 330 \\ + 555 \\ \hline 885 \end{array}$$

$$\begin{array}{r} 610 \\ + 358 \\ \hline 968 \end{array}$$