

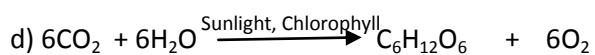
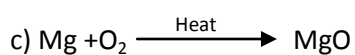
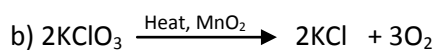
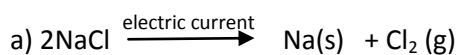
## Worksheet

1. Classify the following into physical or chemical changes:

- a) Burning of a candle
- b) Respiration by plants
- c) Manufacture of Hydrogen chloride acid
- d) Cutting of fruits
- e) Magnetizing a soft iron bar.

2. Classify the following on the basis of the terms given below:

Thermal, Electrolytic, Catalytic, Photochemical



### Homework from the book

Objective questions :

Page no 34, 35 and 36

A, B,C, E - 3, 6,8, 9, 11,12 , F,G