




**WELLAND GOULDSMITH SCHOOL
SOCIAL STUDIES
(GEOGRAPHY)
ANSWER KEY
CLASS- V**

Q1. Give meanings:

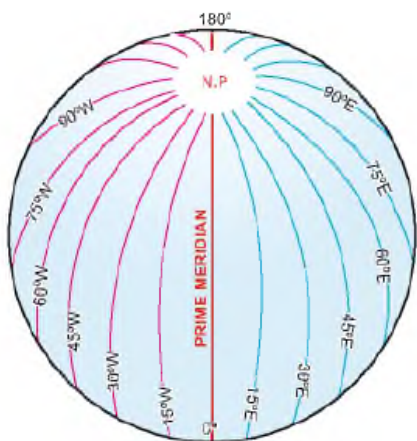
1. Extreme Climate- **Very hot in summers and very cold in winters.**
2. Meteorologist- **Scientist who studies and forecasts the weather.**
3. Scale- **The relationship between the distance of two places shown on the map and their actual distance on the Earth's surface.**
4. Latitude- **Imaginary horizontal lines on the globe, running from east to west.**
5. Hemisphere- **One half of the Earth.**
6. Axis- **Imaginary line around which the Earth rotates.**

Q2. Draw, Colour and label.

(a) Symbols.

- i. Important Town 
- ii. Temple 
- iii. State Boundary 
- iv. Dam 

(b) Meridians of longitude.



ACTIVITY

Q3. With the help of T.V or newspaper, make a daily weather chart (for 1week) of the place where you live.

Day	Mon	Tue	Wed	Thu	Fri	Sat	Sun	Place
Date								
Max.Temp								
Min.Temp								
Humidity								

ACTIVITY

Q4. Word Search:

H	A	O	R	B	T	Y	A	O	T	M	A	P
E	E	C	O	R	Q	L	A	M	D	C	O	R
M	B	E	N	R	E	U	Y	E	F	S	S	I
I	H	A	U	I	M	Q	T	S	H	S	A	M
S	B	N	N	L	O	G	U	L	S	A	R	E
P	M	I	G	B	L	R	I	A	P	P	E	M
H	T	E	H	P	E	S	N	T	T	M	O	E
E	H	G	R	B	O	U	E	I	D	O	C	R
R	T	Y	O	S	D	E	A	T	I	C	R	I
E	Y	L	O	N	G	I	T	U	D	E	R	D
H	G	N	T	E	U	I	P	D	A	M	O	I
S	S	C	O	N	T	I	N	E	N	T	P	A
E	R	F	H	O	R	L	G	T	D	U	E	N

Compass

Latitude

Continent

Longitude

Equator

Map

Globe

Ocean

Hemisphere

Prime Meridian