



(Worksheet)

A. Name these early calculating machines.



1. _____



2. _____

3. _____



4. _____






5. _____



6. _____

7. _____



B. Pioneers of Modern Computer. Recognize the following and mention what are they famous for.




1.

2.



3.



4.



5.



C. Match the given operating system with their trade mark.

1.

b. Windows



2.

c. Android



3.

d. Linux



4.

e. iOS



D. State one function for each.

1. Microsoft Word



2. Tux paint



3. Lotus 1.2.3



4. Open Office Impress



E. Give two examples for the following.

1. First Generation Computers: _____

2. Second Generation Computers: _____

3. Third Generation Computers: _____

4. Fourth Generation Computers: _____

5. Fifth Generation Computers: _____