

WELLAND GOULDSMITH SCHOOL, PATULI

SUBJECT: Mathematics

CLASS: III

Evaluation Worksheet

Note: This work is to be done in the Maths exercise book.

Q1) Mental Maths:

a) Circle the smallest number:

1182, 1812, 118, 8112

b) 10 more than 999 is _____.

c) 100 less than 6236 is _____.

d) $3 + 16 = 16 +$ _____.

e) $91 -$ _____ $= 91$

f) _____ $- 16 = 40$

g) 1 minute = _____ seconds

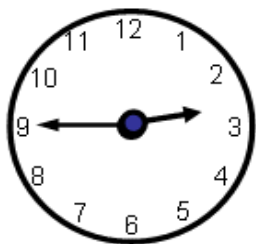
h) The place value of 3 in 9380 is _____.

i) The small hand in a clock is a _____ hand


j) The number for eight thousand eighteen is _____.

Q2 a) Write the time in two ways:

i)



ii)



b) Write the numbers for:

i) $6000 + 200 + 30 + 5 =$ _____

ii) $3000 + 80 + 3 =$ _____.

c) Put $<$, $>$ or $=$ sign in the blanks given below.

i) 7126 _____ 6172

ii) 582 _____ 5280

iii) 909 _____ 909

Q3 a) Match the column

Column A

i) 8:45

ii) 10:40

iii) 6:10

iv) 4:30

v) 7:15

vi) 12 months

Column B

a) Quarter past 7

b) 365 days

c) Quarter to 9

d) 10 minutes past 6

e) 20 minutes to 11

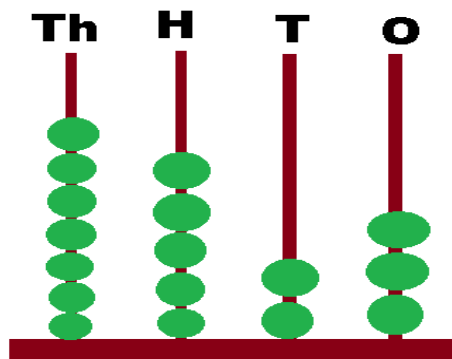
f) Half past 4

b) Write the expanded form of:

i) 5972 _____

ii) 8436 _____

Q4 a) Look at the abacus and fill in the blanks.



- i) Number = _____
- ii) Expanded form = _____
- iii) Digits in hundred place = _____
- iv) Predecessor of the number = _____
- v) 100 more than the number = _____
- vi) 1000 less than the number = _____

b) Arrange in columns and find the sum.

- i) $6472 + 4731$
- ii) $1280 + 3054$

Q5 a) Subtract

- i) 2506 from 6432
- ii) 4068 from 9567

b) Solve the following:

- i) $800 - 500 + 243$
- ii) $795 + 185 - 600$
- iii) $678 - 214 - 142$