

Welland Gouldsmith School

Subject Mathematics Work Sheet

Class KG

2 time table

A) Circle every second number and write down

The circled number.

,1 2 3 4 5. 6. 7. 8. 9. 10

11 12 13 14 15 16 17 18 19 20

B) Count and write.

00. =

00 + 00. =

00+00+00 =

00+00+00+00. =

00+00+00+00+00. =

00+00+00+00+00+00. =

00+00+00+00+00+00+00. =

00+00+00+00+00+00+00+00. =

00+00+00+00+00+00+00+00+00. =

00+00+00+00+00+00+00+00+00+00. =

C) Say and write once again.

$$2*1=2$$

$$2*2=4$$

$$2*3=6$$

$$2*4=8$$

$$2*5=10$$

$$2*6=12$$


$$2*7=14$$

$$2*8=16$$







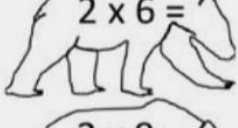

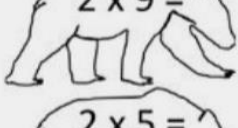

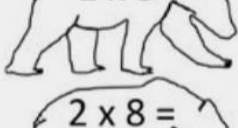

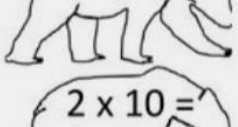

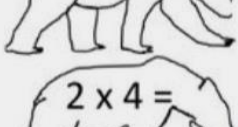



$$2*9=18$$

$$2*10=20$$

D) Match the correct number.

 **2 TIMES TABLE - BEARS ANSWERS**

Draw a line to match each bear to his pot of honey.

 $2 \times 3 =$	 12
 $2 \times 7 =$	 6
 $2 \times 2 =$	 18
 $2 \times 6 =$	 4
 $2 \times 9 =$	 16
 $2 \times 5 =$	 8
 $2 \times 8 =$	 20
 $2 \times 10 =$	 14
 $2 \times 4 =$	 10

