

Welland Gouldsmith school

Subject Mathematics worksheet

Class KG.

All the work must be done in the mathematics exercise book.

A) Skin count in 5s

B) Write the 5 times tables

C) Write the Answer inside the rocket.

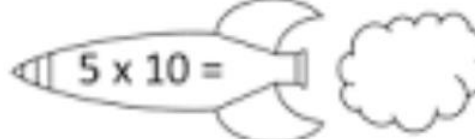
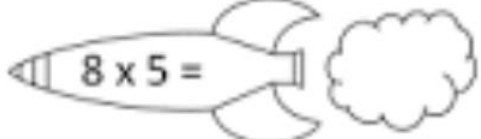
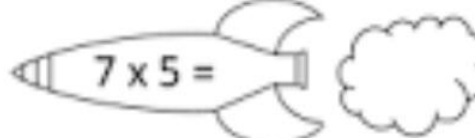
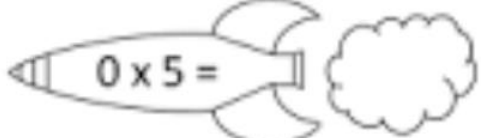
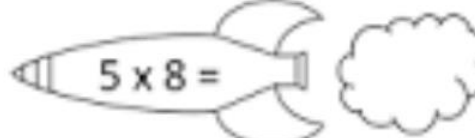
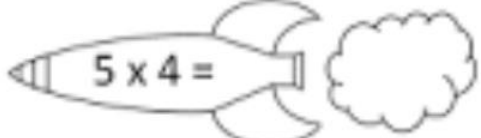
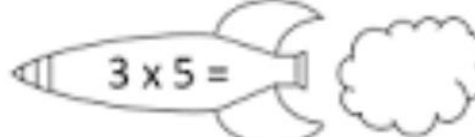
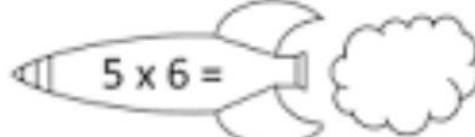
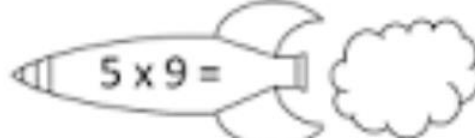
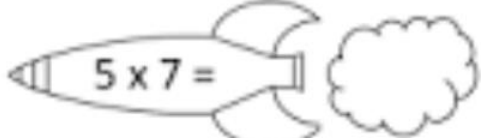
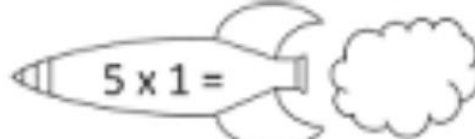
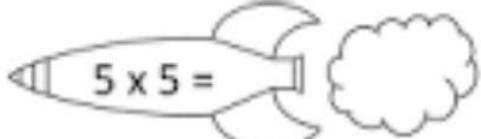
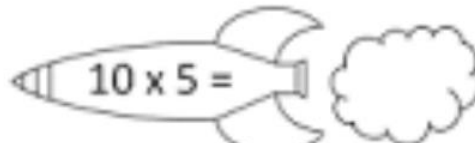
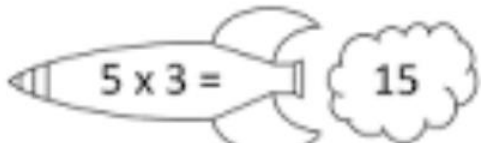


Date



5 TIMES TABLE - ROCKETS

Write the answers inside the rocket smoke.



D) Find the correct answer.

$5 * 3 = . \quad 40$

$5 * 9 = \quad 20$

$5 * 8 = . \quad 15$

$5 * 4 = . \quad 45$

$5 * 2 = . \quad 50$

$5 * 10 = . \quad 35.$

$5 * 7 = . \quad 10$

$5 * 1 = . \quad 30.$

$5 * 6 = . \quad 5$

$5 * 5 = . \quad 25$