

WELLAND GOULDSMITH SCHOOLS

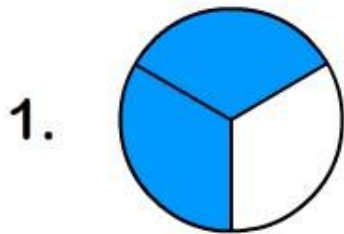
CLASS : III

SUBJECT: MATHEMATICS WORKSHEET

TOPIC: FRACTIONS

Q1)


Circle the correct fraction from the given choices.



$$\frac{3}{4}$$

$$\frac{2}{3}$$

$$\frac{1}{4}$$



$$\frac{3}{4}$$

$$\frac{1}{5}$$


$$\frac{2}{3}$$



$$\frac{2}{4}$$

$$\frac{4}{5}$$

$$\frac{5}{6}$$




$$\frac{4}{8}$$

$$\frac{1}{3}$$

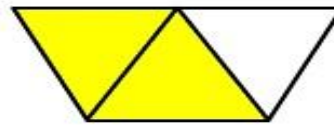
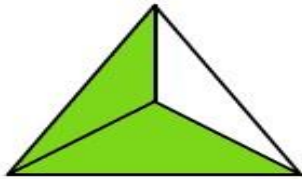
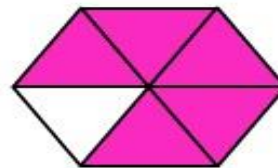
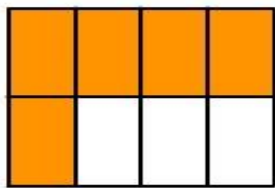
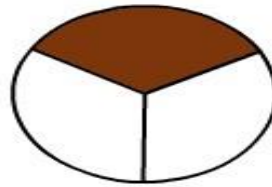
$$\frac{1}{2}$$

Q2)

What fraction does the colored part show?



$\frac{3}{4}$



Q3) Write the fraction :

	Numerator	Denominator	Fraction
a)	3	5	<input type="text"/>
b)	5	7	<input type="text"/>
c)	6	11	<input type="text"/>
d)	7	9	<input type="text"/>
e)	9	13	<input type="text"/>

	Numerator	Denominator	Fraction
f)	2	8	_____
g)	4	7	_____
h)	6	10	_____
i)	3	5	_____
j)	12	18	_____
k)	9	10	_____
l)	7	8	_____
m)	5	12	_____
n)	6	7	_____
o)	13	20	_____
p)	1	5	_____
q)	6	8	2
